



Name _____

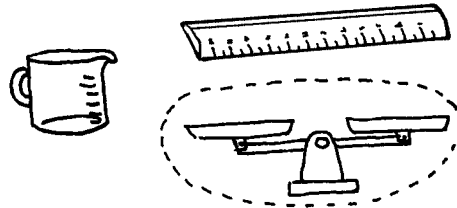
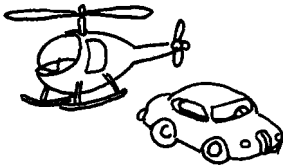
Problem-Solving Application

Choosing Reasonable Answers

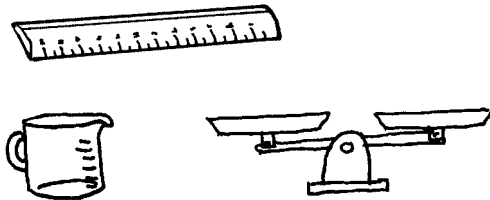
R 8-13

Circle the measuring tool you would use to answer each question.

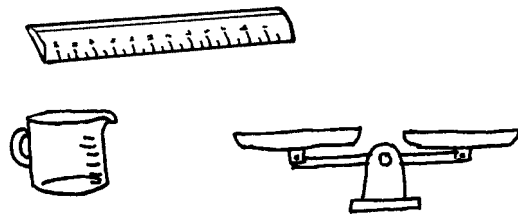
1. Which is heavier?





2. How much does it hold?



3. How long is it?



4. Which object is heavier?



5. How warm is it?

