



Name _____

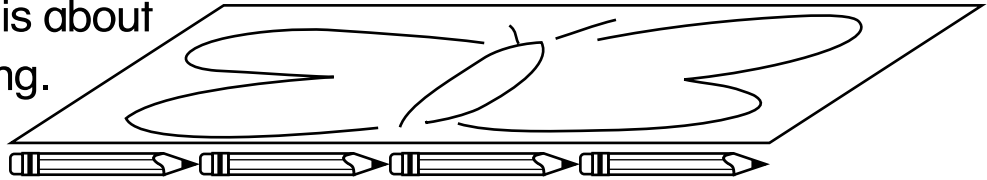
Understanding Length and Height

R 8-1

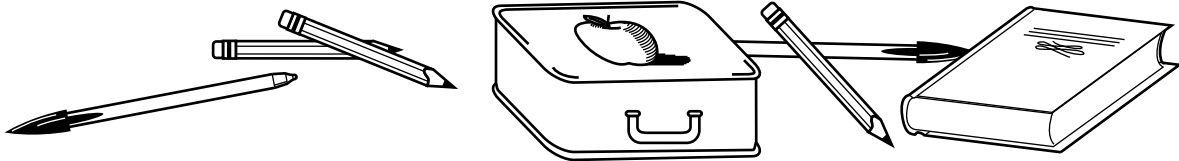
The pencil is about 4 clips long.



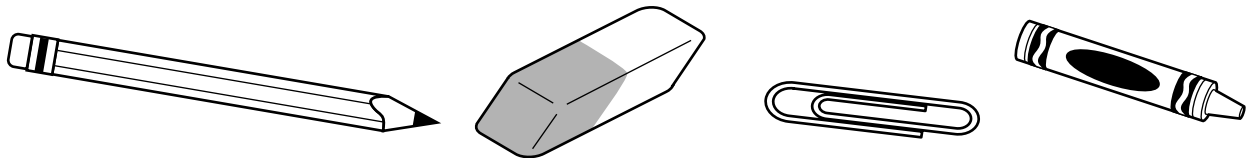
The picture is about 4 pencils long.



Choose something in your desk or backpack to measure.



Choose a unit of measure.



Measure the object. Choose a different unit and measure again.
Complete the chart.

| What I Measured | Unit of Measure | Measurement |
|-----------------|-----------------|----------------------------|
| 1. _____ | _____ _____ | about _____ about _____ |
| 2. _____ | _____ _____ | about _____ about _____ |