

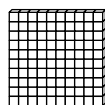


Name \_\_\_\_\_

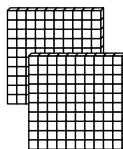
# Patterns with Hundreds

**R** 6-1

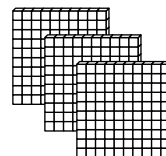
Count by hundreds. Follow the patterns.



1 hundred  
100



2 hundreds  
200



3 hundreds  
300

Count by hundreds. Write the number. Use models if you like.

1. 4 hundreds

Hundreds	Tens	Ones
4	0	0

400

2. 6 hundreds

Hundreds	Tens	Ones

\_\_\_\_\_

3. 8 hundreds

Hundreds	Tens	Ones

\_\_\_\_\_

4. 5 hundreds

Hundreds	Tens	Ones

\_\_\_\_\_

5. 3 hundreds

Hundreds	Tens	Ones

\_\_\_\_\_

6. 7 hundreds

Hundreds	Tens	Ones

\_\_\_\_\_