



Name _____


Time to the Hour and Half Hour

R 5-1

The minute hand points to 12.	The hour hand is between 7 and 8.	The minute hand points to 6.
	The hour hand points to 7.	
seven o'clock		seven-thirty
7:00		7:30


Draw the minute hand. Write the time.

1. one o'clock




⋮

2. one-thirty




⋮

3. four o'clock



⋮

4. four-thirty



⋮