














Name _____

Pennies, Nickels, and Dimes







R 4-1

penny	nickel	dime
 or 	 or 	 or 
1¢	5¢	10¢
one cent	five cents	ten cents







Count on to find the total value.

1.      total

5¢ 6¢ 7¢ 8¢ 9¢ 9¢

2.       total

¢ ¢ ¢ ¢ ¢ ¢ ¢

3.       total

¢ ¢ ¢ ¢ ¢ ¢ ¢

4.      total

¢ ¢ ¢ ¢ ¢ ¢