

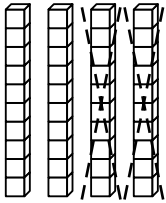


Name \_\_\_\_\_

# Subtracting Tens

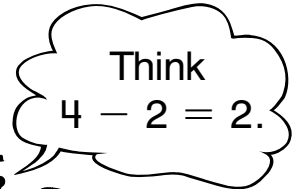
**R** 3-1

You can use basic facts to help subtract tens.



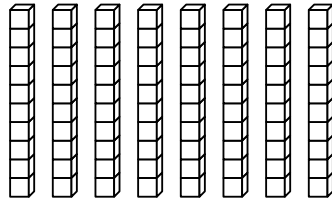
$$4 \text{ tens} - 2 \text{ tens} = \underline{2} \text{ tens}$$

$$40 - 20 = \underline{20}$$



Cross out to help you find each difference.

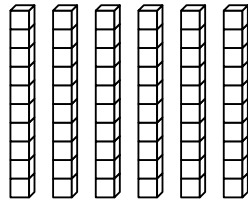
1.  $80 - 30$



$$8 \text{ tens} - 3 \text{ tens} = \underline{\quad} \text{ tens}$$

$$80 - 30 = \underline{\quad}$$

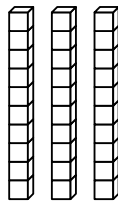
2.  $60 - 20$



$$6 \text{ tens} - 2 \text{ tens} = \underline{\quad} \text{ tens}$$

$$60 - 20 = \underline{\quad}$$

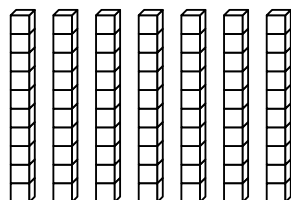
3.  $30 - 10$



$$3 \text{ tens} - 1 \text{ ten} = \underline{\quad} \text{ tens}$$

$$30 - 10 = \underline{\quad}$$

4.  $70 - 40$



$$7 \text{ tens} - 4 \text{ tens} = \underline{\quad} \text{ tens}$$

$$70 - 40 = \underline{\quad}$$