



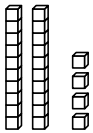
Name _____

Ways to Show Numbers


R 2-1

You can show a number in different ways.

You can use models.



You can use pictures.



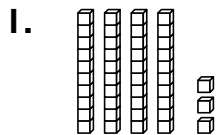
You can write
tens and ones.

2 tens 4 ones

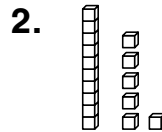
You can write
the number.

24

Write tens and ones.



_____ tens _____ ones



_____ ten _____ ones

3. 47

_____ tens _____ ones

4. 55

_____ tens _____ ones

Write the number.

