



Name _____

Modeling Multiplication

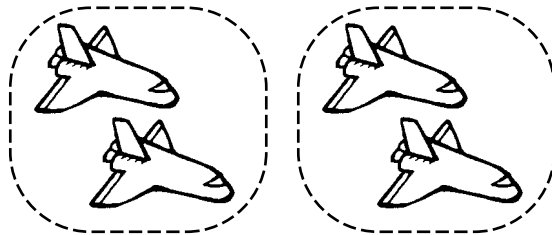
R 11-1

3 groups
2 in each group
6 in all


First I count the groups.

Circle each group. Write how many in all.


1. _____ groups
_____ in each group
_____ in all



2. _____ groups
_____ in each group
_____ in all



3. _____ groups
_____ in each group
_____ in all



4. _____ groups
_____ in each group
_____ in all

