



Name _____

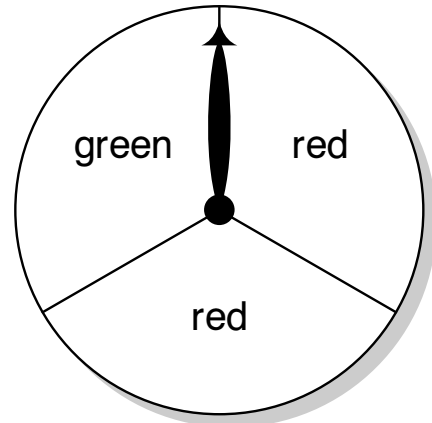
Probability

R 10-13

Spin the spinner.
What color is the spinner
more likely to land on?

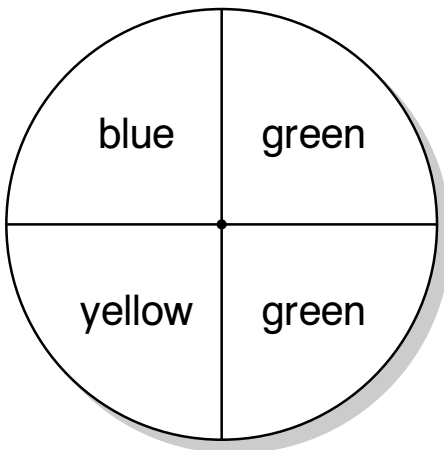
Think: How many of each color
are on the spinner?

There are 2 red colors and
1 green color on the spinner.
The spinner will more likely land on red.



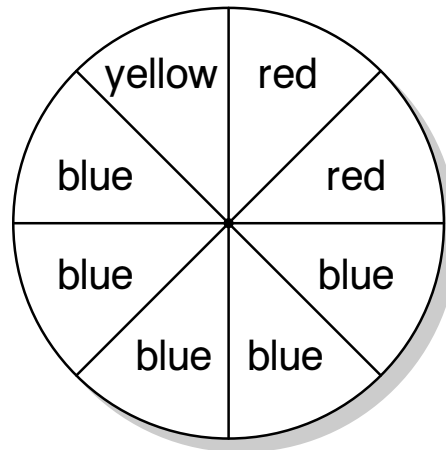
Circle the color you think each spinner
will land on most often.

1.



red blue
yellow green

2.



red blue
yellow green